

Şekil Sayı Eşleştirme

→
= 6

◇
= 4

☆
= 2

+

▽
= 1

△
= 3

□
= 9

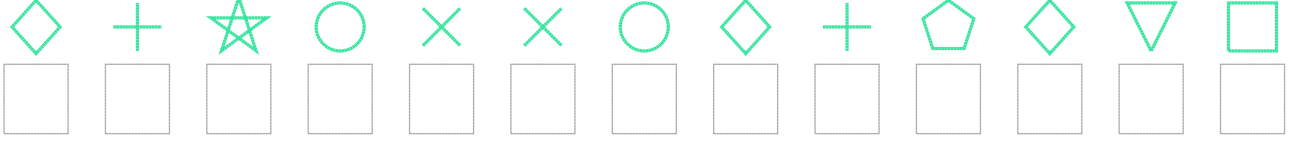
×

⬠
= 5

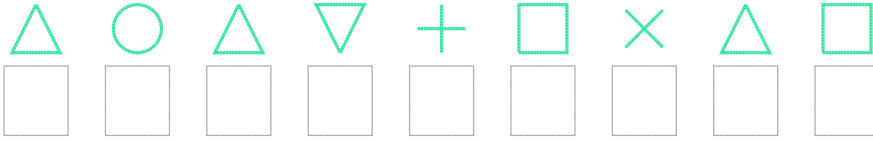
○
= 8

Aşağıdaki uzun şifreleri hatasız çözerek altlarına yazın:

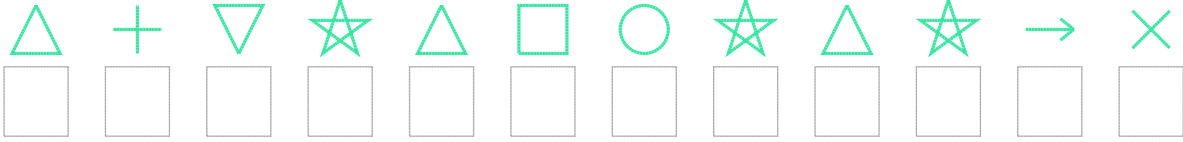
1. Şifre



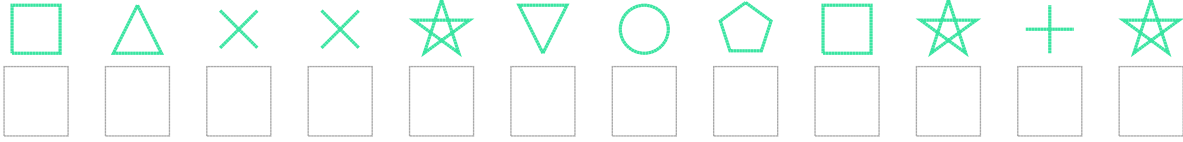
2. Şifre



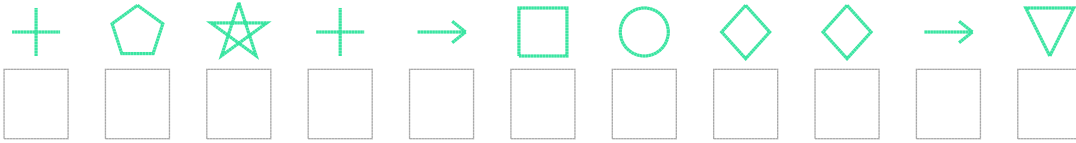
3. Şifre



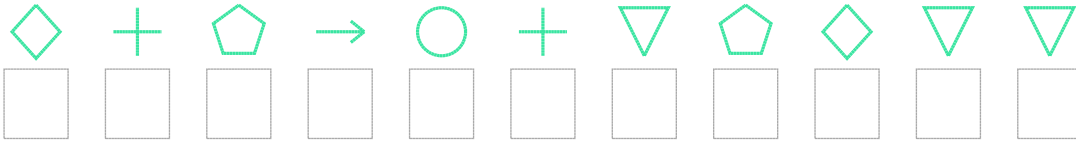
4. Şifre



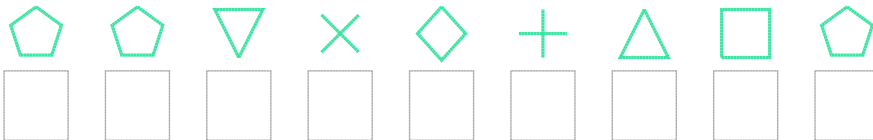
5. Şifre



6. Şifre



7. Şifre



□ BONUS: 3. ve 5. şifrenin ikinci rakamının toplamı kaçtır?

Cevap Anahtarı

1. Şifre: 4728008475419

2. Şifre: 383179039

3. Şifre: 371239823260

4. Şifre: 930021859272

5. Şifre: 75276984461

6. Şifre: 47568715411

7. Şifre: 551047395

□ Bonus Soru Cevabı: 12